



अध्ययन मंत्र™

Learning Today... Leading Tomorrow...

Test Date	07/03/2022
Test Time	4:30 PM - 6:30 PM
Subject	Assistant Teacher (Primary)

Section : Mental Ability

Q.1 'A + B' means A is the brother of B. If 'A - B' means 'A is the sister of B', 'A * B' means 'A is the husband of B', 'A ÷ B' means 'A is the mother of B' and 'A @ B' means 'A is the father of B'. Which of the following expression represents P as the father in law of S?

- Ans
- A. $Q + R - P @ T * S$
 - B. $P * R - Q + T @ S$
 - C. $P + Q @ R + S - T$
 - D. $T @ Q + S * P - R$

Question ID : 1034352839

Q.2 In the following question, a group of letters is given. The letters of each group are related with the letters of the same group by some Logic/Rule/Relation. From the given alternatives, select a group of letters which follows the same Logic/Rule/Relation.

(VM, WN, XO)

- Ans
- A. (AD, BE, CG)
 - B. (EP, DQ, CR)
 - C. (ST, TU, UV)
 - D. (JN, LO, MP)

Question ID : 1034352834

Q.3 In the following question below are given some statements followed by some conclusions based on those statements. Taking the given statements to be true even if they seem to be at variance from commonly known facts. Read all the conclusions and then decide which of the given conclusion logically follows the given statements.

Statements:

- I. All A are B.
- II. Some B are C.
- III. All C are D.

Conclusions:

- I. Some A are D.
- II. Some C are A.
- III. Some B are D.

- Ans
- A. Only II
 - B. Only III
 - C. II and III
 - D. Only I

Question ID : 1034352841

Q.4 In the following question below are given some statements followed by some conclusions based on those statements. Taking the given statements to be true even if they seem to be at variance from commonly known facts. Read all the conclusions and then decide which of the given conclusion logically follows the given statements.

Statements:

I. All A are B.

II. Some B are C.

Conclusions:

I. Some A are C.

II. All B are A.

- Ans
- A. Only conclusion I follows
 - B. Both conclusion I and II follows
 - C. Neither conclusion follows
 - D. Only conclusion II follows

Question ID : 1034352840

Q.5 A series is given with one term wrong. Select that wrong term from the given alternatives.

4, 2, 2, 3, 6, 15, 45, 157.

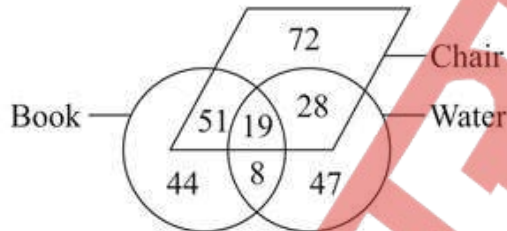
- Ans
- A. 6
 - B. 15
 - C. 45
 - D. 157

Question ID : 1034352842

Q.6 Based on the given venn diagram, which of the following statement(s) is/are correct?

I. The number of chairs which are water is 28.

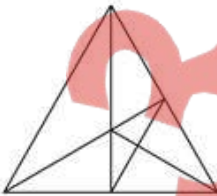
II. Number of books which are not chair is 52.



- Ans
- A. Neitehr I nor II
 - B. Both I and II
 - C. Only I
 - D. Only II

Question ID : 1034352845

Q.7 How many triangles are there in the given figure?



- Ans
- A. 16
 - B. 20
 - C. 22
 - D. 18

Question ID : 1034352850

Q.8 Ravi starts walking towards the north. He turns to the right. Then he turns to the left. Finally, he turns to the right at the angle of 45 degree. In which direction is he walking now?

- Ans A. North-East
 B. North-West
 C. East
 D. South-West

Question ID : 1034352846

Q.9 A series is given with one term missing. Select the correct alternative from the given ones that will complete the series.

OS, SN, WI, AD, EY, ?

- Ans A. JU
 B. IT
 C. IU
 D. JT

Question ID : 1034352831

Q.10 In a certain code language, 'I belong to you' is written as '# @ *', 'you belong to them' is written as '@ % *', 'we belong them' is written as '+ % @'. What is the code for 'we to you' in that code language?

- Ans A. + * @
 B. % @ *
 C. % * @
 D. + @ @

Question ID : 1034352836

Q.11 Raju walks 70 metres towards the south. He turns to the left and walks 80 metres. He turns to the right and walks 70 metres. He turns to the right and walks 30 metres. Finally, he turns to the right and walks 20 metres. How far and in which direction is he now from the starting point?

- Ans A. 120 metres, South-East
 B. 130 metres, South-West
 C. 130 metres, South-East
 D. 120 metres, South-West

Question ID : 1034352847

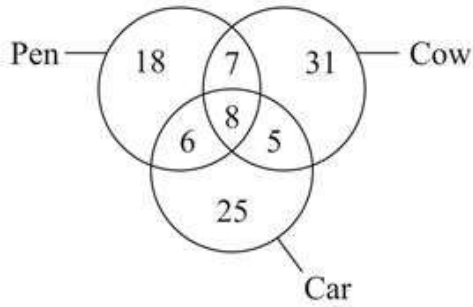
Q.12 Arrange the given words in the sequence in which they occur in the dictionary.

1. Cardiodynias
2. Cardiospasm
3. Carburetting
4. Carburettors
5. Carcinogenic

- Ans A. 34512
 B. 34521
 C. 43512
 D. 43521

Question ID : 1034352832

Q.13 How many cows are cars but not pens?



- Ans A. 5
 B. 12
 C. 36
 D. 7

Question ID : 1034352844

Q.14 In the following question, select the figure which can be placed at the sign of question mark (?) from the given alternatives.



- Ans A.
- B.
- C.
- D.

Question ID : 1034352848

Q.15 In the following question, select the odd word from the given alternatives.

- Ans A. Mango
 B. Cabbage
 C. Banana
 D. Peach

Question ID : 1034352833

Q.16 In the following question, select the number which can be placed at the sign of question mark (?) from the given alternatives.

16	8	13
17	12	23
21	15	19
162	105	?

- Ans
- A. 135
 - B. 187
 - C. 137
 - D. 165

Question ID : 1034352843

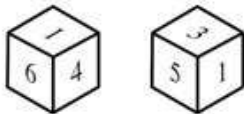
Q.17 In the following question, select the related letter pair from the given alternatives.

RCT : TZY :: ?

- Ans
- A. VPL : XMU
 - B. JSN : LPR
 - C. CJX : AGD
 - D. MQF : ONK

Question ID : 1034352835

Q.18 Two positions of a dice are shown. When 2 is at bottom, then which number will be at the top?



- Ans
- A. 4
 - B. 6
 - C. 3
 - D. 1

Question ID : 1034352849

Q.19 Five persons A, B, C, D and E sit in a row facing towards the north (not necessarily in the same order). One person sits between B and C. One person sits between E and A. One person sits between B and D. E sits to the immediate right of D. Who sits at the extreme ends?

- Ans
- A. C and D
 - B. B and E
 - C. C and E
 - D. B and C

Question ID : 1034352837

Q.20 Six students P, Q, R, S, T and U go to six different schools S1, S2, S3, S4, S5 and S6 (not necessarily in the same order) No two students go to the same school. U goes to one school among S2 and S6. Q does not go to S3 and S5. R goes to S1. P does not go to S3. T does not go to S3, S4, S5 and S6. Which of the following combination is not correct?

- Ans
- A. S- S3
 - B. Q- S4
 - C. P- S5
 - D. U- S2

Question ID : 1034352838

Section : General Awareness

Q.1 Which of the following statement is correct?
I. In Angiosperms, seeds develop inside an ovary which is modified to become a fruit.
II. Bryophytes are called amphibians of the plant kingdom.

- Ans
- A. Only II
 - B. Both I and II
 - C. Only I
 - D. Neither I nor II

Question ID : 1034352857

Q.2 National Small Industry Day in India is observed every year on _____.

- Ans
- A. 30 September
 - B. 30 July
 - C. 30 October
 - D. 30 August

Question ID : 1034352864

Q.3 Which of the following statement is correct?
I. Kamaicha is a type of stringed instrument.
II. Tabla is a type of percussion instrument.

- Ans
- A. Only I
 - B. Only II
 - C. Neither I nor II
 - D. Both I and II

Question ID : 1034352852

Q.4 Sardar Sarovar Dam has been built in the state of _____.

- Ans
- A. Gujarat
 - B. Madhya Pradesh
 - C. Maharashtra
 - D. Rajasthan

Question ID : 1034352858

Q.5 Which of the following statement is correct?
I. India shares its land boundaries with seven countries.
II. Sri Lanka is separated from India by a narrow channel of sea formed by the Palk Strait and the Gulf of Mannar.

- Ans A. Only II
 B. Only I
 C. Both I and II
 D. Neither I nor II

Question ID : 1034352860

Q.6 GATT was established in _____.

- Ans A. 1945
 B. 1949
 C. 1948
 D. 1946

Question ID : 1034352853

Q.7 Which of the following statement is correct?
I. The MSF rate and reverse repo rate determine the corridor for the daily movement in the weighted average call money rate.
II. Open market operations include both, outright purchase and sale of government securities for injection and absorption of durable liquidity respectively.

- Ans A. Only II
 B. Both I and II
 C. Neither I nor II
 D. Only I

Question ID : 1034352854

Q.8 Which article of Indian constitution deals with uniform civil code for the citizens?

- Ans A. Article 48
 B. Article 49
 C. Article 45
 D. Article 44

Question ID : 1034352867

Q.9 Which of the following is NOT a rabi crops?

I. Barley
II. Jowar

- Ans A. Only I
 B. Neither I nor II
 C. Both I and II
 D. Only II

Question ID : 1034352859

Q.10 Avani Lekhara is associated with which sports?

- Ans A. Badminton
 B. Table Tennis
 C. Shooting
 D. Swimming

Question ID : 1034352869

Q.11 Tenth schedule of Indian constitution deals with _____.

- Ans A. provisions as to disqualification on ground of defection
 B. allocation of seats in the council of states
 C. Languages
 D. forms of oaths or affirmations

Question ID : 1034352868

Q.12 Which of the following institute has developed "e-source" that will serve as an online marketplace for waste Electrical and Electronic Equipment?

- Ans A. IIT Ropar
 B. IIT Kanpur
 C. IIT Delhi
 D. IIT Madras

Question ID : 1034352866

Q.13 World EV day is celebrated every year on _____.

- Ans A. 8 September
 B. 12 September
 C. 6 September
 D. 9 September

Question ID : 1034352865

Q.14 The breakdown of pyruvate using oxygen takes place in _____.

- Ans A. Cytoplasm
 B. Nucleus
 C. Mitochondria
 D. Ribosomes

Question ID : 1034352856

Q.15 In which year Non-cooperation movement was called off by Mahatma Gandhi?

- Ans A. 1920
 B. 1919
 C. 1921
 D. 1922

Question ID : 1034352861

Q.16 Sattriya is the classical dance form of which state?

- Ans A. Assam
 B. Karnataka
 C. Kerala
 D. Manipur

Question ID : 1034352851

Q.17 Which of the following statement is correct?
I. Hampi was the capital of the Vijayanagar Empire.
II. In 1687 Mughal Emperor Aurangzeb annexed Golconda.

- Ans A. Only II
 B. Both I and II
 C. Only I
 D. Neither I nor II

Question ID : 1034352863

Q.18 In which year Sher Khan defeated Humayun at Chausa?

- Ans A. 1540
 B. 1542
 C. 1541
 D. 1539

Question ID : 1034352862

Q.19 Headquarter of International Cricket Council is situated in _____.

- Ans A. Dubai
 B. Melbourne
 C. London
 D. Johannesburg

Question ID : 1034352870

Q.20 Atomic mass of Calcium is _____.

- Ans A. 40
 B. 38
 C. 39
 D. 42

Question ID : 1034352855

Section : Arithmetic Ability

Q.1 If 8.5 percent of a number exceeds 4.5 percent of the same number by 1.6, then what is the value of the number?

- Ans A. 40
 B. 20
 C. 30
 D. 10

Question ID : 1034352877

Q.2 If the Least Common Multiple and Highest Common Factor of 63, 105 and 21 are L and M respectively, then what is the value of L + M?

- Ans A. 342
 B. 315
 C. 336
 D. 357

Question ID : 1034352875

Q.3 Deepak alone can do a work in 30 hours. Deepak and Rahul together can do the same work in 20 hours. Rahul and Varun together can do the same work in 15 hours. In how many hours can Varun alone do the same work?

- Ans A. 25 hours
 B. 22 hours
 C. 17 hours
 D. 20 hours

Question ID : 1034352885

Q.4 A trader sells a shirt at the profit of 40 percent. Had he bought that shirt at 20 percent less price and sold it at Rs. 100 less, then he would have earned a profit of 40 percent. What is the cost price of the shirt?

- Ans A. Rs. 357.14
 B. Rs. 350
 C. Rs. 420.36
 D. Rs. 366.66

Question ID : 1034352879

Q.5 The sum of circumference and diameter of a circle is 116 cm. What is the radius of the circle?

- Ans A. 21 cm
 B. 35 cm
 C. 28 cm
 D. 14 cm

Question ID : 1034352886

Q.6 The table given below shows the number of boys and girls in five schools.

School	Boys	Girls
A	250	130
B	100	200
C	120	75
D	105	50
E	200	160

J1 = The value of average number of boys in all schools.

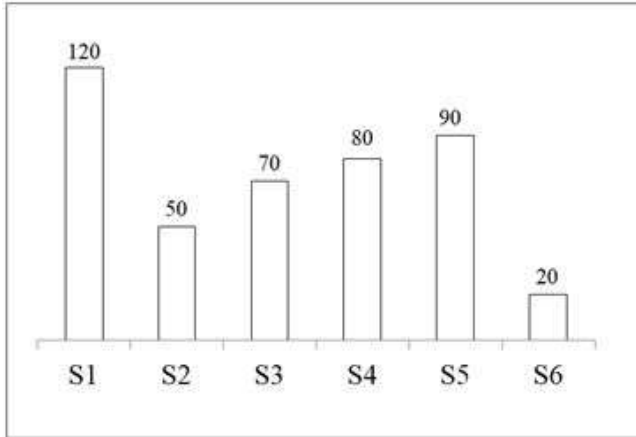
J2 = The difference between the total number of boys and total number of girls in all schools.

What is the value of (J1: J2)?

- Ans A. 33 : 31
 B. 40 : 39
 C. 29 : 30
 D. 31 : 32

Question ID : 1034352888

Q.7 The bar graph given below shows the production of rice by six states.



The production of rice by S2 is what percent of the production of rice by S6?

- Ans A. 250 Percent
 B. 60 Percent
 C. 200 Percent
 D. 40 Percent

Question ID : 1034352889

Q.8 What is the difference between $\frac{2}{3}$ of $\frac{17}{4}$ of 288 and $\frac{1}{5}$ of $\frac{2}{9}$ of 585?

- Ans A. 780
 B. 800
 C. 810
 D. 790

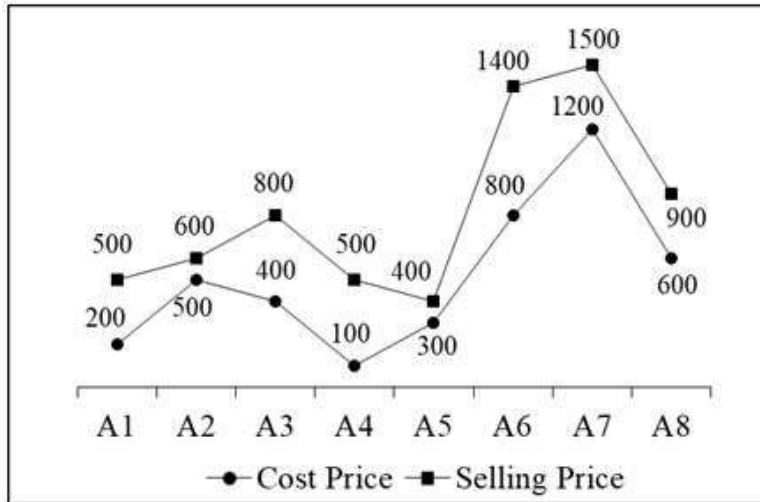
Question ID : 1034352874

Q.9 Average of 10 numbers is 74. If a number is removed, then the average becomes 71. Which number was removed?

- Ans A. 96
 B. 117
 C. 123
 D. 101

Question ID : 1034352876

Q.10 The line chart given below shows the cost price and selling price of eight articles.



Profit percentage = $\left[\frac{\text{Selling price} - \text{cost price}}{\text{cost price}}\right] \times 100$

Which of the following is in the correct sequence of profit percentage of eight articles?

- Ans
- A. $A4 > A1 > A3 > A8 > A6 > A5 > A7 > A2$
 - B. $A4 > A1 > A3 > A6 > A8 > A5 > A2 > A7$
 - C. $A4 > A1 > A3 > A6 > A8 > A5 > A7 > A2$
 - D. $A5 > A4 > A1 > A3 > A6 > A8 > A7 > A2$

Question ID : 1034352890

Q.11 What is the value of $1.75 \times 1.75 - 3.5 \times 0.75 + 0.75 \times 0.75$?

- Ans
- A. 0.625
 - B. 0.75
 - C. 2
 - D. 1

Question ID : 1034352873

Q.12 A person lent certain sum of money at the annual rate of 10 percent on simple interest and the interest received in 6 years is Rs. 880 less than the sum lent. What is the sum lent?

- Ans
- A. Rs. 2000
 - B. Rs. 2200
 - C. Rs. 1760
 - D. Rs. 2400

Question ID : 1034352882

Q.13 75 percent of P's income is equal to 37.5 percent of Q's income. If P's income is Rs. 24000, then what is Q's income?

- Ans
- A. Rs. 12000
 - B. Rs. 28000
 - C. Rs. 48000
 - D. Rs. 24000

Question ID : 1034352878

Q.14 What is the value of $45 + 20 \times 3 \div (4 \times 5) + 88$?

- Ans A. 126
 B. 116
 C. 136
 D. 146

Question ID : 1034352871

Q.15 In a school, $\frac{7}{9}$ of the students are girls. If the number of boys is 144, then what is the number of girls?

- Ans A. 112
 B. 504
 C. 144
 D. 648

Question ID : 1034352872

Q.16 Pulkit starts walking from G towards H. Ramesh starts walking from H towards G at the same time. The speed of Pulkit and Ramesh are 30 km/hr and 18 km/hr respectively. After meeting each other, time taken by Ramesh to reach G is 75 hours. What is the time taken by Pulkit to reach H after meeting Ramesh?

- Ans A. 24 hours
 B. 21 hours
 C. 30 hours
 D. 27 hours

Question ID : 1034352884

Q.17 Mixture of milk and water in three bottles of equal capacity is in the ratio 2 : 1, 3 : 1 and 2 : 3 respectively. These three bottles are emptied into a large bottle. What will be the ratio of milk and water respectively in the large bottle?

- Ans A. 108 : 71
 B. 109 : 71
 C. 109 : 81
 D. 110 : 71

Question ID : 1034352881

Q.18 The ratio of speed of three racers is 1 : 2 : 3. What is the respective ratio of time taken by the three racers to cover the same distance?

- Ans A. 6 : 3 : 4
 B. 6 : 3 : 1
 C. 3 : 2 : 6
 D. 6 : 3 : 2

Question ID : 1034352880

Q.19 Radius of a hemisphere is 21 cm. Numerical value of volume of hemisphere is equal to the 4 times the numerical value of area of a rectangle. Length of the rectangle is 11 times of the breadth. What is the perimeter of this rectangle?

- Ans A. 504 cm
 B. 420 cm
 C. 252 cm
 D. 210 cm

Question ID : 1034352887

Q.20 Two trains are moving in the same direction at the speed of 67 km/hr and 107 km/hr. The time taken by faster train to cross a man sitting in the slower train is 18 seconds. What will be the length of the faster train?

- Ans
- A. 340 metres
 - B. 280 metres
 - C. 200 metres
 - D. 160 metres

Question ID : 1034352883

Section : General English

Q.1 In the following question, out of the given four alternatives, select the alternative which best expresses the meaning of the Idiom/Phrase.

An eye for an eye

- Ans
- A. Retaliation
 - B. A cause for anger
 - C. To speak frankly
 - D. Weak in health

Question ID : 1034352903

Q.2 Choose the word that means the same as the given word.

Cloudy

- Ans
- A. Danger
 - B. Unclear
 - C. Diminish
 - D. Down

Question ID : 1034352899

Q.3 In the following question, out of the given four alternatives, select the alternative which best expresses the meaning of the Idiom/Phrase.

To bite the dust

- Ans
- A. To be a slave of someone
 - B. To die
 - C. In under developing stage
 - D. To fall on your face

Question ID : 1034352904

Q.4 Select the most appropriate option to substitute the underlined segment in the given sentence. If no substitution is required, select 'No improvement' as your answer.

Soon after the meeting commences then the board calls for the chairman's resignation.

- Ans
- A. Soon after the meeting commences when
 - B. No sooner had the meeting commenced than
 - C. No improvement
 - D. As soon as the meeting commenced when

Question ID : 1034352894

Q.5 In the given question, four words are given out of which one word is correctly spelt. Choose the correctly spelt word.

- Ans A. Privilege
 B. Priviledge
 C. Privilage
 D. Privelege

Question ID : 1034352901

Q.6 Select the most appropriate option to substitute the underlined segment in the given sentence. If no substitution is required, select 'No improvement' as your answer.

All states impose severe penalties on drivers that drive when he or she is drunk.

- Ans A. No improvement
 B. drivers which drive when he or she are drunk
 C. drivers who drive when they are drunk
 D. drivers which drive when they are drunk

Question ID : 1034352893

Q.7 The question below consists of a set of labeled sentences. Out of the four options given, select the most logical order of the sentences to form a coherent paragraph.

P. In case you are not familiar with them, resistance bands are similar to an elastic band.

Q. Resistance-band exercises have been all over social media during the pandemic.

R. You can loop them around your legs or arms, for example, which helps create more tension while you work out.

S. This tension makes it more difficult to do movements, and engages more muscles.

- Ans A. QSPR
 B. RQPS
 C. QPRS
 D. SPQR

Question ID : 1034352898

Q.8 Choose the word that is opposite in meaning to the given word.

Dilettante

- Ans A. Inept
 B. Swallow
 C. Ace
 D. Amateur

Question ID : 1034352900

Q.9 In the given question, four words are given out of which one word is correctly spelt. Choose the correctly spelt word.

- Ans A. Feenix
 B. Phoenix
 C. Phinix
 D. Pheenix

Question ID : 1034352902

Q.10 A sentence has been given with a blank to be filled with an appropriate word. Choose the correct alternative.

The government has _____ smoking in public places.

- Ans
- A. avoided
 - B. prevented
 - C. stopped
 - D. banned

Question ID : 1034352896

Q.11 Find the part of the given sentence that has an error in it. If there is no error, choose 'No error'.

Slashing expenditure to compress the deficit (1)/ and please the rating agencies will do (2)/more harm than good for economic revival (3)/. No error (4)

- Ans
- A. 2
 - B. 4
 - C. 3
 - D. 1

Question ID : 1034352892

Q.12 Find the part of the given sentence that has an error in it. If there is no error, choose 'No error'.

Women are getting educated (1)/ and affluent, and is (2)/no longer helpless pawns (3)/.No error (4)

- Ans
- A. 2
 - B. 1
 - C. 4
 - D. 3

Question ID : 1034352891

Q.13 A sentence has been given with a blank to be filled with an appropriate word. Choose the correct alternative.

They were sitting _____ the tree?

- Ans
- A. with
 - B. by
 - C. into
 - D. of

Question ID : 1034352895

Q.14 Rearrange the parts of the sentence in correct order.

Conscript armies grew
P. in most countries, in which young men were
Q. required to undergo a year or two of military training
R. and were then sent home as reserves to
S. be mobilized or called to action when needed for fighting

- Ans
- A. PQRS
 - B. RPSQ
 - C. QPRS
 - D. PSQR

Question ID : 1034352897

Q.15 Choose the word that can substitute the given sentence.

A person who leads an immoral life

- Ans A. Hedonist
 B. Libertine
 C. Salubrious
 D. Debonair

Question ID : 1034352905

Comprehension:

Read the following information carefully and answer the given questions.

The devastation caused by extreme weather in Tamil Nadu remains a damning indictment on India's ability to effectively address such emergencies, whether that be taking preventative measures or actually coping with the aftermath with a proper disaster management plan. Cyclone Gaja saw 45 deaths reported, crops destroyed and livestock killed. One farmer committed suicide after his small coconut plantation – his main source of income – was destroyed. People were traumatised in coastal districts that were unprepared for winds of the speed of 160km/h – a category 2 tropical cyclone according to the Saffir-Simpson hurricane wind scale. Millions of trees were uprooted, agricultural land devastated, transportation blocked by debris, communications downed and there were power outages for eight weeks. Three months on and there is still only a limited power supply to some remote areas.

It was this very same southern state which faced Cyclone Ockhi in 2017, Cyclone Vardah in 2016, man-made flooding in Chennai in 2015, and of course, the Boxing Day Indian Ocean tsunami in 2004. Around 300 Tamil Nadu fishermen missing after Cyclone Ockhi have never been found.

India is part of the Sendai Framework, an organisation that helps participating countries to adopt disaster risk reduction as a key goal in achieving a sustainable society. The country only released its first national disaster management plan in 2016, despite all of the states on the Bay of Bengal having a history of extreme weather events.

Cyclone Gaja stands as a warning to international disaster organisations; they must prepare the countries they work with more thoroughly for future weather disasters. They need to make clear that taking measures to limit the extent of disaster cannot be voluntary, but mandatory. It will take months to clear the debris and repair the infrastructure, and years to rehabilitate entire villages across Tamil Nadu. It is time to establish a proper framework that helps developing countries to facilitate an effective response to an emergency, crucially with the help of other, more developed nations.

SubQuestion No : 16

Q.16 Which of the following words is opposite in meaning to the word 'Devastated'?

- Ans A. Inculcate
 B. Uprooted
 C. Patched
 D. Wreck

Question ID : 1034352911

Comprehension:

Read the following information carefully and answer the given questions.

The devastation caused by extreme weather in Tamil Nadu remains a damning indictment on India's ability to effectively address such emergencies, whether that be taking preventative measures or actually coping with the aftermath with a proper disaster management plan. Cyclone Gaja saw 45 deaths reported, crops destroyed and livestock killed. One farmer committed suicide after his small coconut plantation – his main source of income – was destroyed. People were traumatised in coastal districts that were unprepared for winds of the speed of 160km/h – a category 2 tropical cyclone according to the Saffir-Simpson hurricane wind scale. Millions of trees were uprooted, agricultural land devastated, transportation blocked by debris, communications downed and there were power outages for eight weeks. Three months on and there is still only a limited power supply to some remote areas. It was this very same southern state which faced Cyclone Ockhi in 2017, Cyclone Vardah in 2016, man-made flooding in Chennai in 2015, and of course, the Boxing Day Indian Ocean tsunami in 2004. Around 300 Tamil Nadu fishermen missing after Cyclone Ockhi have never been found.

India is part of the Sendai Framework, an organisation that helps participating countries to adopt disaster risk reduction as a key goal in achieving a sustainable society. The country only released its first national disaster management plan in 2016, despite all of the states on the Bay of Bengal having a history of extreme weather events.

Cyclone Gaja stands as a warning to international disaster organisations; they must prepare the countries they work with more thoroughly for future weather disasters. They need to make clear that taking measures to limit the extent of disaster cannot be voluntary, but mandatory. It will take months to clear the debris and repair the infrastructure, and years to rehabilitate entire villages across Tamil Nadu. It is time to establish a proper framework that helps developing countries to facilitate an effective response to an emergency, crucially with the help of other, more developed nations.

SubQuestion No : 17

Q.17 Which of the following words is similar in meaning to the the word-'Voluntary'?

- Ans**
- A. Coercive
 - B. Sultry
 - C. Volitional
 - D. Novice

Question ID : 1034352910

Comprehension:

Read the following information carefully and answer the given questions.

The devastation caused by extreme weather in Tamil Nadu remains a damning indictment on India's ability to effectively address such emergencies, whether that be taking preventative measures or actually coping with the aftermath with a proper disaster management plan. Cyclone Gaja saw 45 deaths reported, crops destroyed and livestock killed. One farmer committed suicide after his small coconut plantation – his main source of income – was destroyed. People were traumatised in coastal districts that were unprepared for winds of the speed of 160km/h – a category 2 tropical cyclone according to the Saffir-Simpson hurricane wind scale. Millions of trees were uprooted, agricultural land devastated, transportation blocked by debris, communications downed and there were power outages for eight weeks. Three months on and there is still only a limited power supply to some remote areas. It was this very same southern state which faced Cyclone Ockhi in 2017, Cyclone Vardah in 2016, man-made flooding in Chennai in 2015, and of course, the Boxing Day Indian Ocean tsunami in 2004. Around 300 Tamil Nadu fishermen missing after Cyclone Ockhi have never been found.

India is part of the Sendai Framework, an organisation that helps participating countries to adopt disaster risk reduction as a key goal in achieving a sustainable society. The country only released its first national disaster management plan in 2016, despite all of the states on the Bay of Bengal having a history of extreme weather events.

Cyclone Gaja stands as a warning to international disaster organisations; they must prepare the countries they work with more thoroughly for future weather disasters. They need to make clear that taking measures to limit the extent of disaster cannot be voluntary, but mandatory. It will take months to clear the debris and repair the infrastructure, and years to rehabilitate entire villages across Tamil Nadu. It is time to establish a proper framework that helps developing countries to facilitate an effective response to an emergency, crucially with the help of other, more developed nations.

SubQuestion No : 18

Q.18 Which of the following cyclones has not been mentioned in the passage?

- Ans A. Cyclone Gaja
 B. Cyclone Amphan
 C. Cyclone Vardah
 D. Cyclone Ockhi

Question ID : 1034352907

Comprehension:

Read the following information carefully and answer the given questions.

The devastation caused by extreme weather in Tamil Nadu remains a damning indictment on India's ability to effectively address such emergencies, whether that be taking preventative measures or actually coping with the aftermath with a proper disaster management plan. Cyclone Gaja saw 45 deaths reported, crops destroyed and livestock killed. One farmer committed suicide after his small coconut plantation – his main source of income – was destroyed. People were traumatised in coastal districts that were unprepared for winds of the speed of 160km/h – a category 2 tropical cyclone according to the Saffir-Simpson hurricane wind scale. Millions of trees were uprooted, agricultural land devastated, transportation blocked by debris, communications downed and there were power outages for eight weeks. Three months on and there is still only a limited power supply to some remote areas. It was this very same southern state which faced Cyclone Ockhi in 2017, Cyclone Vardah in 2016, man-made flooding in Chennai in 2015, and of course, the Boxing Day Indian Ocean tsunami in 2004. Around 300 Tamil Nadu fishermen missing after Cyclone Ockhi have never been found.

India is part of the Sendai Framework, an organisation that helps participating countries to adopt disaster risk reduction as a key goal in achieving a sustainable society. The country only released its first national disaster management plan in 2016, despite all of the states on the Bay of Bengal having a history of extreme weather events.

Cyclone Gaja stands as a warning to international disaster organisations; they must prepare the countries they work with more thoroughly for future weather disasters. They need to make clear that taking measures to limit the extent of disaster cannot be voluntary, but mandatory. It will take months to clear the debris and repair the infrastructure, and years to rehabilitate entire villages across Tamil Nadu. It is time to establish a proper framework that helps developing countries to facilitate an effective response to an emergency, crucially with the help of other, more developed nations.

SubQuestion No : 19

Q.19 Read the given passage and rearrange the given natural disasters chronologically in the ascending order.

- A. The Boxing Day Indian Ocean tsunami
- B. Cyclone Ockhi
- C. Man-made flooding in Chennai

- Ans
- A. BCA
 - B. BAC
 - C. CAB
 - D. ACB

Question ID : 1034352909

Comprehension:

Read the following information carefully and answer the given questions.

The devastation caused by extreme weather in Tamil Nadu remains a damning indictment on India's ability to effectively address such emergencies, whether that be taking preventative measures or actually coping with the aftermath with a proper disaster management plan. Cyclone Gaja saw 45 deaths reported, crops destroyed and livestock killed. One farmer committed suicide after his small coconut plantation – his main source of income – was destroyed. People were traumatised in coastal districts that were unprepared for winds of the speed of 160km/h – a category 2 tropical cyclone according to the Saffir-Simpson hurricane wind scale. Millions of trees were uprooted, agricultural land devastated, transportation blocked by debris, communications downed and there were power outages for eight weeks. Three months on and there is still only a limited power supply to some remote areas. It was this very same southern state which faced Cyclone Ockhi in 2017, Cyclone Vardah in 2016, man-made flooding in Chennai in 2015, and of course, the Boxing Day Indian Ocean tsunami in 2004. Around 300 Tamil Nadu fishermen missing after Cyclone Ockhi have never been found.

India is part of the Sendai Framework, an organisation that helps participating countries to adopt disaster risk reduction as a key goal in achieving a sustainable society. The country only released its first national disaster management plan in 2016, despite all of the states on the Bay of Bengal having a history of extreme weather events.

Cyclone Gaja stands as a warning to international disaster organisations; they must prepare the countries they work with more thoroughly for future weather disasters. They need to make clear that taking measures to limit the extent of disaster cannot be voluntary, but mandatory. It will take months to clear the debris and repair the infrastructure, and years to rehabilitate entire villages across Tamil Nadu. It is time to establish a proper framework that helps developing countries to facilitate an effective response to an emergency, crucially with the help of other, more developed nations.

SubQuestion No : 20

Q.20 According to the given passage, all statements are true EXCEPT:

- Ans A. Many Tamil Nadu fishermen missing after Cyclone Ockhi have never been found.
- B. India released its first national disaster management plan in 2016.
- C. There were power outages for eight weeks after cyclone Gaja.
- D. Sendai framework is semi-constitutional body adopted to provide disaster free country.

Question ID : 1034352908

Section : General Hindi

**Q.1 दिए गए शब्द का समास ज्ञात कीजिए।
यथासंभव**

- Ans A. कर्मधारय समास
- B. अव्ययीभाव समास
- C. तत्पुरुष समास
- D. द्वंद्व समास

Question ID : 1034352913

**Q.2 दिए गए वाक्य से निजवाचक सर्वनाम ज्ञात कीजिए।
सफलता पाने के लिए तुम्हें स्वयं कठोर परिश्रम करना पड़ेगा।**

- Ans A. के लिए
- B. करना
- C. तुम्हें
- D. स्वयं

Question ID : 1034352912

Q.3 दिए गए वाक्य में 'गंगा नदी गंगोत्री से' में उपयोग हुए कारक के रूप की पहचान कीजिए।
गंगा नदी गंगोत्री से निकलती है।

- Ans A. सम्प्रदान
 B. अपादान
 C. सम्बन्ध
 D. करण

Question ID : 1034352919

Q.4 दिए गए वाक्य के लिए उचित विराम चिन्ह का चयन कीजिए।
अनीता मधु पूनम और नीरू अपने कार्य में मग्न है।

- Ans A. :
 B. ;
 C. ?
 D. .

Question ID : 1034352924

Q.5 निम्नलिखित प्रश्न में, दिए गए चार विकल्पों में से, उस विकल्प का चयन करें जो दिए गए मुहावरे के अर्थ को सर्वश्रेष्ठ रूप से व्यक्त करता है।
नाच नचाना

- Ans A. थका देना
 B. घमंड चूर करना
 C. बंदर का खेल दिखाना
 D. मनचाही करवाना

Question ID : 1034352926

Q.6 दिए गए शब्दों का गलत तत्सम-तद्भव ज्ञात कीजिए।

- Ans A. चूमना-चुम्बन
 B. घोड़ा-घोटक
 C. कैवल-कैबल
 D. घृत-धी

Question ID : 1034352914

Q.7 निम्नलिखित प्रश्न में, दिए गए चार विकल्पों में से, उस विकल्प का चयन करें जो दिए गए मुहावरे के अर्थ को सर्वश्रेष्ठ रूप से व्यक्त करता है।
अन्त बिगाड़ना

- Ans A. बेकदर होना
 B. निंदा करना
 C. परिणाम खराब करना
 D. कुछ भी ध्यान न देना

Question ID : 1034352925

Q.8 दिए गए शब्द का विलोम शब्द ज्ञात कीजिए।
उर्ध्वगामी

- Ans A. उदयाचल
 B. विमुख
 C. अधोगामी
 D. अधम

Question ID : 1034352915

Q.9 निम्नलिखित वाक्यों में से मिश्र वाक्य ज्ञात कीजिए।

- Ans A. मुकेश मेरे पास आया इसलिए मैं कर्नाटक चला गया।
 B. मुकेश मेरे पास आते ही मैं कर्नाटक चला जाऊँगा।
 C. यदि मुकेश मेरे पास आता तो मैं कर्नाटक चला जाऊँगा।
 D. जब मुकेश मेरे पास नहीं आएगा तब मैं कर्नाटक चला जाऊँगा।

Question ID : 1034352922

Q.10 दिए गए शब्द युग्म का सही शब्द युग्म ज्ञात कीजिए।
कलि : कली

- Ans A. कलिका : दुर्ग
 B. दुर्ग : कीर
 C. कीर : कलियुग
 D. कलियुग : कलिका

Question ID : 1034352916

Q.11 निम्नलिखित वाक्यों में से संयुक्त वाक्य ज्ञात कीजिए।

- Ans A. यदि छुट्टियाँ हुईं तो हम हांगकांग अवश्य जाएँगे।
 B. जब छुट्टियाँ होगी तब हम हांगकांग अवश्य जाएँगे।
 C. छुट्टियाँ हुईं फिर भी हम हांगकांग नहीं गये।
 D. छुट्टियाँ होते ही हम हांगकांग अवश्य जाएँगे।

Question ID : 1034352921

Q.12 निम्नलिखित में से अल्प विराम चिन्ह की पहचान कीजिए है।

- Ans A. .
 B. "
 C. ,
 D. ;

Question ID : 1034352923

Q.13 दिए गए शब्द का स्त्रीलिंग रूप ज्ञात कीजिए।
परोपकारी

- Ans A. परोपकनी
 B. परोपकारी
 C. परउपकारिन
 D. परोपकारिनी

Question ID : 1034352920

Q.14 दिए गए शब्दों में अशुद्ध वर्तनी का चयन कीजिए।

- Ans A. स्थायित्व
 B. निरोग
 C. स्वस्थ
 D. एक्यता

Question ID : 1034352917

Q.15 दिए गए वाक्य में उपयुक्त शब्द का चयन करके रिक्त स्थान की पूर्ति कीजिए।
तुम _____ रहते हो?

- Ans A. जहाँ
 B. वहीं
 C. किन्तु
 D. कहाँ

Question ID : 1034352918

Comprehension:

एक गद्यांश दिया गया है। गद्यांश के आधार पर पाँच प्रश्न दिए गए हैं। गद्यांश को ध्यानपूर्वक पढ़ें तथा प्रत्येक प्रश्न के चार विकल्पों में से सही विकल्प चुने।

100 साल पहले, किसी ने भी यह नहीं सोचा होगा कि इंसान खुद ही किसी ऐसी चीज़ की रचना कर देगा, जिससे दुनिया की तमाम सारी जानकारी एक ही स्थान पर बहुत ही आसानी से मिल जाएगी और दुनिया के लगभग सभी देश आपस में जुड़े होंगे। धीरे-धीरे इंटरनेट के विकास के साथ इसके फायदे और महत्व हर क्षेत्र में दिखने लगे और यह तकनीक इंटरनेट क्रांति के रूप में पूरी दुनिया में फैल गई।

सन् 1969 में टिम बर्नर्स ली ने इंटरनेट का आविष्कार किया। इसे सबसे पहले सन् 1969 में अमेरिका के प्रतिरक्षा विभाग द्वारा एडवांस रिसर्च प्रोजेक्ट एजेंसी नेटवर्क के गुप्त आंकड़ों और सूचनाओं को दूर दराज़ के विभिन्न राज्यों तक भेजने व प्राप्त करने में लाया गया था। हमारे भारत देश में इंटरनेट 1980 के दशक में आया था।

इंटरनेट को संक्षिप्त में नेट भी कहा जाता है क्योंकि इंटरनेट एक दूसरे से जुड़े बहुत सारे नेटवर्कों का जाल है।

इंटरनेट आई. टी. के क्षेत्र में क्रांति लाने वाला विश्व का सबसे बलशाली और सबसे बड़ा नेटवर्क है।

इंटरनेट की सफलता की वजह इसकी विशेषता और उपयोगिता है। इसकी सुगमता और उपयोगिता की वजह से, ये हर जगह इस्तेमाल हो रहा है। सूचनाओं और जानकारीयों का इसका अथाह ज्ञान, इसके उपयोग को और अधिक बढ़ा देता है। इसकी इसी विशेषता के कारण उपयोगकर्ताओं की संख्या दिन प्रतिदिन बढ़ती जा रही है।

वास्तव में इंटरनेट एक सार्वजनिक सुविधा है और कोई भी इसका उपयोग कर सकता है। आज मानव की सफलता के पीछे इंटरनेट का बहुत बड़ा योगदान है। साथ ही यह एक सरल और सस्ता साधन है।

SubQuestion No : 16

Q.16 उपर्युक्त अपठित गद्यांश का शीर्षक होगा?

- Ans A. भारत में इंटरनेट
 B. इंटरनेट और नेट
 C. इंटरनेट का आविष्कार
 D. इंटरनेट किसने बनाया?

Question ID : 1034352928

Comprehension:

एक गद्यांश दिया गया है। गद्यांश के आधार पर पाँच प्रश्न दिए गए हैं। गद्यांश को ध्यानपूर्वक पढ़ें तथा प्रत्येक प्रश्न के चार विकल्पों में से सही विकल्प चुने।

100 साल पहले, किसी ने भी यह नहीं सोचा होगा कि इंसान खुद ही किसी ऐसी चीज़ की रचना कर देगा, जिससे दुनिया की तमाम सारी जानकारी एक ही स्थान पर बहुत ही आसानी से मिल जाएगी और दुनिया के लगभग सभी देश आपस में जुड़े होंगे। धीरे-धीरे इंटरनेट के विकास के साथ इसके फायदे और महत्व हर क्षेत्र में दिखने लगे और यह तकनीक इंटरनेट क्रांति के रूप में पूरी दुनिया में फैल गई।

सन् 1969 में टिम बर्नर्स ली ने इंटरनेट का आविष्कार किया। इसे सबसे पहले सन् 1969 में अमेरिका के प्रतिरक्षा विभाग द्वारा एडवांस रिसर्च प्रोजेक्ट एजेंसी नेटवर्क के गुप्त आंकड़ों और सूचनाओं को दूर दराज़ के विभिन्न राज्यों तक भेजने व प्राप्त करने में लाया गया था। हमारे भारत देश में इंटरनेट 1980 के दशक में आया था।

इंटरनेट को संक्षिप्त में नेट भी कहा जाता है क्योंकि इंटरनेट एक दूसरे से जुड़े बहुत सारे नेटवर्कों का जाल है।

इंटरनेट आई. टी. के क्षेत्र में क्रांति लाने वाला विश्व का सबसे बलशाली और सबसे बड़ा नेटवर्क है।

इंटरनेट की सफलता की वजह इसकी विशेषता और उपयोगिता है। इसकी सुगमता और उपयोगिता की वजह से, ये हर जगह इस्तेमाल हो रहा है। सूचनाओं और जानकारीयों का इसका अथाह ज्ञान, इसके उपयोग को और अधिक बढ़ा देता है। इसकी इसी विशेषता के कारण उपयोगकर्ताओं की संख्या दिन प्रतिदिन बढ़ती जा रही है।

वास्तव में इंटरनेट एक सार्वजनिक सुविधा है और कोई भी इसका उपयोग कर सकता है। आज मानव की सफलता के पीछे इंटरनेट का बहुत बड़ा योगदान है। साथ ही यह एक सरल और सस्ता साधन है।

वास्तव में इंटरनेट एक सार्वजनिक सुविधा है और कोई भी इसका उपयोग कर सकता है। आज मानव की सफलता के पीछे इंटरनेट का बहुत बड़ा योगदान है। साथ ही यह एक सरल और सस्ता साधन है।

SubQuestion No : 17

Q.17 इंटरनेट को 'नेट' क्यों कहा जाता है?

- Ans A. क्योंकि यह विश्व सबसे बड़ा नेटवर्क है।
 B. क्योंकि यह सबसे सस्ता नेटवर्क है।
 C. क्योंकि यह नेटवर्कों का नेटवर्क है।
 D. क्योंकि यह बहुत सारे नेटवर्कों का जाल है।

Question ID : 1034352930

Comprehension:

एक गद्यांश दिया गया है। गद्यांश के आधार पर पाँच प्रश्न दिए गए हैं। गद्यांश को ध्यानपूर्वक पढ़ें तथा प्रत्येक प्रश्न के चार विकल्पों में से सही विकल्प चुने।

100 साल पहले, किसी ने भी यह नहीं सोचा होगा कि इंसान खुद ही किसी ऐसी चीज़ की रचना कर देगा, जिससे दुनिया की तमाम सारी जानकारी एक ही स्थान पर बहुत ही आसानी से मिल जाएगी और दुनिया के लगभग सभी देश आपस में जुड़े होंगे। धीरे-धीरे इंटरनेट के विकास के साथ इसके फायदे और महत्व हर क्षेत्र में दिखने लगे और यह तकनीक इंटरनेट क्रांति के रूप में पूरी दुनिया में फैल गई।

सन् 1969 में टिम बर्नर्स ली ने इंटरनेट का आविष्कार किया। इसे सबसे पहले सन् 1969 में अमेरिका के प्रतिरक्षा विभाग द्वारा एडवांस रिसर्च प्रोजेक्ट एजेंसी नेटवर्क के गुप्त आंकड़ों और सूचनाओं को दूर दराज़ के विभिन्न राज्यों तक भेजने व प्राप्त करने में लाया गया था। हमारे भारत देश में इंटरनेट 1980 के दशक में आया था।

इंटरनेट को संक्षिप्त में नेट भी कहा जाता है क्योंकि इंटरनेट एक दूसरे से जुड़े बहुत सारे नेटवर्कों का जाल है।

इंटरनेट आई. टी. के क्षेत्र में क्रांति लाने वाला विश्व का सबसे बलशाली और सबसे बड़ा नेटवर्क है।

इंटरनेट की सफलता की वजह इसकी विशेषता और उपयोगिता है। इसकी सुगमता और उपयोगिता की वजह से, ये हर जगह इस्तेमाल हो रहा है। सूचनाओं और जानकारीयों का इसका अथाह ज्ञान, इसके उपयोग को और अधिक बढ़ा देता है। इसकी इसी विशेषता के कारण उपयोगकर्ताओं की संख्या दिन प्रतिदिन बढ़ती जा रही है।

वास्तव में इंटरनेट एक सार्वजनिक सुविधा है और कोई भी इसका उपयोग कर सकता है। आज मानव की सफलता के पीछे इंटरनेट का बहुत बड़ा योगदान है। साथ ही यह एक सरल और सस्ता साधन है।

SubQuestion No : 18**Q.18** भारत देश में इंटरनेट कौन से दशक में आया था?Ans A. 1980 B. 1969 C. 1990 D. 1880

Question ID : 1034352932

Comprehension:

एक गद्यांश दिया गया है। गद्यांश के आधार पर पाँच प्रश्न दिए गए हैं। गद्यांश को ध्यानपूर्वक पढ़ें तथा प्रत्येक प्रश्न के चार विकल्पों में से सही विकल्प चुने।

100 साल पहले, किसी ने भी यह नहीं सोचा होगा कि इंसान खुद ही किसी ऐसी चीज़ की रचना कर देगा, जिससे दुनिया की तमाम सारी जानकारी एक ही स्थान पर बहुत ही आसानी से मिल जाएगी और दुनिया के लगभग सभी देश आपस में जुड़े होंगे। धीरे-धीरे इंटरनेट के विकास के साथ इसके फायदे और महत्व हर क्षेत्र में दिखने लगे और यह तकनीक इंटरनेट क्रांति के रूप में पूरी दुनिया में फैल गई।

सन् 1969 में टिम बर्नर्स ली ने इंटरनेट का आविष्कार किया। इसे सबसे पहले सन् 1969 में अमेरिका के प्रतिरक्षा विभाग द्वारा एडवांस रिसर्च प्रोजेक्ट एजेंसी नेटवर्क के गुप्त आंकड़ों और सूचनाओं को दूर दराज़ के विभिन्न राज्यों तक भेजने व प्राप्त करने में लाया गया था। हमारे भारत देश में इंटरनेट 1980 के दशक में आया था।

इंटरनेट को संक्षिप्त में नेट भी कहा जाता है क्योंकि इंटरनेट एक दूसरे से जुड़े बहुत सारे नेटवर्कों का जाल है।

इंटरनेट आई. टी. के क्षेत्र में क्रांति लाने वाला विश्व का सबसे बलशाली और सबसे बड़ा नेटवर्क है।

इंटरनेट की सफलता की वजह इसकी विशेषता और उपयोगिता है। इसकी सुगमता और उपयोगिता की वजह से, ये हर जगह इस्तेमाल हो रहा है। सूचनाओं और जानकारीयों का इसका अथाह ज्ञान, इसके उपयोग को और अधिक बढ़ा देता है। इसकी इसी विशेषता के कारण उपयोगकर्ताओं की संख्या दिन प्रतिदिन बढ़ती जा रही है।

वास्तव में इंटरनेट एक सार्वजनिक सुविधा है और कोई भी इसका उपयोग कर सकता है। आज मानव की सफलता के पीछे इंटरनेट का बहुत बड़ा योगदान है। साथ ही यह एक सरल और सस्ता साधन है।

SubQuestion No : 19**Q.19** मानव की सफलता के पीछे किसका सबसे बड़ा योगदान है?Ans A. भारत का B. इंटरनेट का C. समस्याओं का D. अमेरिका का

Question ID : 1034352931

Comprehension:

एक गद्यांश दिया गया है। गद्यांश के आधार पर पाँच प्रश्न दिए गए हैं। गद्यांश को ध्यानपूर्वक पढ़ें तथा प्रत्येक प्रश्न के चार विकल्पों में से सही विकल्प चुनें।

100 साल पहले, किसी ने भी यह नहीं सोचा होगा कि इंसान खुद ही किसी ऐसी चीज़ की रचना कर देगा, जिससे दुनिया की तमाम सारी जानकारी एक ही स्थान पर बहुत ही आसानी से मिल जाएगी और दुनिया के लगभग सभी देश आपस में जुड़े होंगे। धीरे-धीरे इंटरनेट के विकास के साथ इसके फायदे और महत्व हर क्षेत्र में दिखने लगे और यह तकनीक इंटरनेट क्रांति के रूप में पूरी दुनिया में फैल गई।

सन् 1969 में टिम बर्नर्स ली ने इंटरनेट का आविष्कार किया। इसे सबसे पहले सन् 1969 में अमेरिका के प्रतिरक्षा विभाग द्वारा एडवांस रिसर्च प्रोजेक्ट एजेंसी नेटवर्क के गुप्त आंकड़ों और सूचनाओं को दूर दराज़ के विभिन्न राज्यों तक भेजने व प्राप्त करने में लाया गया था। हमारे भारत देश में इंटरनेट 1980 के दशक में आया था।

इंटरनेट को संक्षिप्त में नेट भी कहा जाता है क्योंकि इंटरनेट एक दूसरे से जुड़े बहुत सारे नेटवर्कों का जाल है।

इंटरनेट आई. टी. के क्षेत्र में क्रांति लाने वाला विश्व का सबसे बलशाली और सबसे बड़ा नेटवर्क है।

इंटरनेट की सफलता की वजह इसकी विशेषता और उपयोगिता है। इसकी सुगमता और उपयोगिता की वजह से, ये हर जगह इस्तेमाल हो रहा है। सूचनाओं और जानकारियों का इसका अथाह ज्ञान, इसके उपयोग को और

अधिक बढ़ा देता है। इसकी इसी विशेषता के कारण उपयोगकर्ताओं की संख्या दिन प्रतिदिन बढ़ती जा रही है।

वास्तव में इंटरनेट एक सार्वजनिक सुविधा है और कोई भी इसका उपयोग कर सकता है। आज मानव की

सफलता के पीछे इंटरनेट का बहुत बड़ा योगदान है। साथ ही यह एक सरल और सस्ता साधन है।

SubQuestion No : 20**Q.20 कम्प्यूटर का पर्यायवाची शब्द क्या है?**

- Ans
- A. इंटरनेट
 - B. मशीन
 - C. तकनीक
 - D. संगणक

Question ID : 1034352929

Section : Discipline1**Q.1 In the context of cognitive development, which approach studies the basic mechanics of learning?****I. Psychometric approach****II. Behaviorist approach**

- Ans
- A. Only II
 - B. Only I
 - C. Neither I nor II
 - D. Both I and II

Question ID : 1034352941

Q.2 Which physical skills involve the small muscles and eye-hand co-ordination?**I. Fine-motor skills****II. Gross-motor skills**

- Ans
- A. Only I
 - B. Neither I nor II
 - C. Only II
 - D. Both I and II

Question ID : 1034352934

Q.3 In bayley scales of infant development, which of the following pairs is correctly matched?

- I. 12 month – walk alone.
II. 14-16 months – walk down stairs with single feet.

- Ans A. Only II
 B. Neither I nor II
 C. Both I and II
 D. Only I

Question ID : 1034352943

Q.4 In the context of sleep patterns, which of the following statement is correct?

- I. it change throughout the growing-up years.
II. Young children may develop elaborate routines to put off going to bed, and it may take them longer than before to fall asleep.

- Ans A. Neither I nor II
 B. Both I and II
 C. Only I
 D. Only II

Question ID : 1034352940

Q.5 What is systems of action, in the context of motor skills?

- I. Increasingly complex combinations of skills.
II. It permit a wider or more precise range of movement and more control of the environment.

- Ans A. Only I
 B. Neither I nor II
 C. Both I and II
 D. Only II

Question ID : 1034352933

Q.6 Which of the following comes under O (openess to experience) of Costa and McCrae's five factor mode?

- I. Fantasy
II. Anxiety

- Ans A. Only II
 B. Neither I nor II
 C. Both I and II
 D. Only I

Question ID : 1034352939

Q.7 _____ is the sense of capability to master challenges and achieve goals.

- Ans A. Self-efficacy
 B. Me-self
 C. I-self
 D. Self-concept

Question ID : 1034352951

Q.8 In the context of psychosocial development, which of the following pair is correctly matched?

- I. Socialization – process by which children develop habits, skills, values and motives that make them responsible and productive member of society.
II. Internalization – the development of industries in a place or region on a wide scale.

- Ans A. Only I
 B. Only II
 C. Both I and II
 D. Neither I nor II

Question ID : 1034352952

Q.9 Which of the following sub stage of piaget's sensorimotor stage of cognitive development is correctly paired?

- I. 1 to 4 month – primary circular reactions
II. 4 to 8 month – secondary circular reactions

- Ans A. Neither I nor II
 B. Only I
 C. Both I and II
 D. Only II

Question ID : 1034352944

Q.10 In the context of cognitive development, what is classical conditioning?

- I. Learning based on associating a stimulus.
II. It does not ordinarily elicit a response with that stimulus that elicits the response.

- Ans A. Neither I nor II
 B. Both I and II
 C. Only I
 D. Only II

Question ID : 1034352942

Q.11 Which of the following pair of attachment classification - behaviour is correct?

- I. Secure - Garima plays and explores freely when her mother is nearby.
II. Insecure-avoidant - When Ram's mother returns; Ram does not make eye contact with her.

- Ans A. Both I and II
 B. Only II
 C. Only I
 D. Neither I nor II

Question ID : 1034352949

Q.12 Which of the following is the chronic disease involving pathological dependence on alcohol?

- Ans A. Altruism
 B. Pacifism
 C. Alcoholism
 D. Familism

Question ID : 1034352937

Q.13 In the context of motor development, which of the following pair is correctly matched?

- I. Age 6 – children can throw with proper weight shift and step.
II. Age 7 – one footed balancing without looking becomes possible.

- Ans A. Only I
 B. Only II
 C. Neither I nor II
 D. Both I and II

Question ID : 1034352936

Q.14 According to Piaget, which of the following limitations of preoperational thought is correctly matched?

- I. Focus on states rather than transformations – children focus on one aspect of a situation and neglect others.
II. Egocentrism – children assume everyone else thinks, perceives and feels as they do.

- Ans A. Only I
 B. Only II
 C. Both I and II
 D. Neither I nor II

Question ID : 1034352946

Q.15 In piaget's terminology, what is allocentric?

- I. Able to objectively consider relationships among objects or people.
II. Understanding that a person or object still exists when out of sight.

- Ans A. Both I and II
 B. Only II
 C. Neither I nor II
 D. Only I

Question ID : 1034352945

Q.16 What is gender?

- Ans A. Significance of being male or female
 B. Significance of the rich and poor
 C. Significance of the numbers
 D. Significance of appearance

Question ID : 1034352948

Q.17 Which of the following is a genetic influence on health?

- I. Cholesterol
II. Diabetes

- Ans A. Neither I nor II
 B. Only I
 C. Only II
 D. Both I and II

Question ID : 1034352938

Q.18 _____ is the understanding of an ambiguous situation by seeking out another person's perception of it.

- Ans
- A. Economical referencing
 - B. Political referencing
 - C. Cultural referencing
 - D. Social referencing

Question ID : 1034352950

Q.19 _____ is the descriptive and evaluative beliefs about one's appearance.

- Ans
- A. Turbo image
 - B. Drive image
 - C. Micro image
 - D. Body image

Question ID : 1034352935

Q.20 _____ is the appropriateness of environmental demands and constraints to a child temperament.

- Ans
- A. Goodness of healthy
 - B. Meanness of healthy
 - C. Goodness of fit
 - D. Meanness of fit

Question ID : 1034352947

Section : Discipline2

Q.1 Which of the following statements is correct regarding the Norms and standards for a school under the Right of Children to Free and Compulsory Education act, 2009?

- I. Teaching and learning material shall be provided to each class.
- II. Minimum 50 hours teaching per week including preparation hours.

- Ans
- A. Both I and II
 - B. Only II
 - C. Neither I nor II
 - D. Only I

Question ID : 1034352957

Q.2 Which of the following is a type of instructional method used for the teaching and learning process?

- I. Demonstration method.
- II. Inductive and deductive method.

- Ans
- A. Only I
 - B. Neither I nor II
 - C. Both I and II
 - D. Only II

Question ID : 1034352965

Q.3 Piaget conceives of cognitive development as consisting of series of stages. Which of the following pairs of 'Stage-Approximate age' is correct?

- I. Sensorimotor – 0-2 years.
- II. Concrete operational – 12-15 years.
- III. Formal operational – 2-7 years.

- Ans
- A. Only II
 - B. I and II
 - C. Only I
 - D. I and III

Question ID : 1034352969

Q.4 What is the Psychological importance of Inclusive education?

- I. Development of safe and secure feeling in the group.
- II Confidence in the individual ability among the diversity.

- Ans
- A. Neither I nor II
 - B. Only I
 - C. Only II
 - D. Both I and II

Question ID : 1034352962

Q.5 Who among the following was associated with Indian Home Rule league?

- I. Subhash Chandra Bose
- II. Bal Gangadhar Tilak

- Ans
- A. Only I
 - B. Both I and II
 - C. Only II
 - D. Neither I nor II

Question ID : 1034352955

Q.6 Which of the following can be included to encourage students to learn without confining themselves to the textbooks?

- I. Providing newspapers and periodicals.
- II. Visiting local market and working places.
- III. Using electronic media like television and radio.

- Ans
- A. I and III
 - B. Only II
 - C. I, II and III
 - D. II and III

Question ID : 1034352970

Q.7 One of the key ideas of a democratic government is its commitment to _____.

- I. Equality
- II. Justice

- Ans
- A. Both I and II
 - B. Neither I nor II
 - C. Only II
 - D. Only I

Question ID : 1034352956

Q.8 A multi-level situation during teaching arises in _____.

- I. Mono-grade situation.
II. Multi-grade situation.

- Ans A. Only I
 B. Both I and II
 C. Only II
 D. Neither I nor II

Question ID : 1034352966

Q.9 The principle 'the first education should be purely negative' was given by _____.

- Ans A. John Dewey
 B. Immanuel Kant
 C. Jean-Jacques Rousseau
 D. Alfred Binet

Question ID : 1034352967

Q.10 Which of the following pairs of 'Event-Year' is correct in the context of the Indian National Movement?

- I. Jallianwala Bagh Massacre – 1915
II. Swadeshi Movement – 1905

- Ans A. Only II
 B. Neither I nor II
 C. Both I and II
 D. Only I

Question ID : 1034352958

Q.11 In the context of self-regulation, what is committed compliance?

- I. Term for obedience of a parent's orders **only in parental control**.
II. Term for wholehearted obedience of a parent's orders without reminders or lapses.

- Ans A. Neither I nor II
 B. Only I
 C. Only II
 D. Both I and II

Question ID : 1034352953

Q.12 In the context of children with special needs, which of the following factors that are influenced due to visual impairment?

- I. Difficulty with visual output.
II. Problem in utilizing control that depend on vision.
III. Suffering from speech disorder.

- Ans A. I, II and III
 B. I and III
 C. I and II
 D. II and III

Question ID : 1034352964

Q.13 A lesson planning should have which of the following characteristics?

- I. It should be objective-based.
- II. It must be practical or can be implemented in real situations.
- III. It should be brief, comprehensive and simple.

- Ans
- A. Only III
 - B. I, II and III
 - C. II and III
 - D. I and II

Question ID : 1034352971

Q.14 Which of the following team activities is included in the intervention process?

- I. Consultation and partnership with parents.
- II. Evaluate the student learning outcomes.

- Ans
- A. Only I
 - B. Both I and II
 - C. Neither I nor II
 - D. Only II

Question ID : 1034352961

Q.15 In the context of power, which of the following pair is correctly matched?

- I. Power over – Involves a relationship of domination or subordination between individuals or groups.
- II. Power to – Involves people organizing with a common purpose to achieve collective goals.
- III. Power within – Refers to self-confidence, self-awareness and assertiveness.

- Ans
- A. I, II and III
 - B. II and III
 - C. I and II
 - D. I and III

Question ID : 1034352954

Q.16 Which educational thinker has said the following lines? 'I merely started with this one simple idea that education should never be dissociated from life.'

- Ans
- A. Rabindranath Tagore
 - B. Jawaharlal Nehru
 - C. Mahatma Gandhi
 - D. Satyajit Raj

Question ID : 1034352972

Q.17 Which of the following statements is NOT correct about Rosa Parks?

- I. She was a Sri Lankan Women.
- II. She refused to give up her bus seat to a white man on 1 December 1955.
- III. Her Refusal started an agitation which led to the civil rights movement.

- Ans
- A. Only I
 - B. I and III
 - C. I and II
 - D. II and III

Question ID : 1034352959

Q.18 Cognitive disability is used to replace which old terms?

- I. Mental retardation
- II. Physically handicapped

- Ans
- A. Both I and II
 - B. Only II
 - C. Only I
 - D. Neither I nor II

Question ID : 1034352963

Q.19 Play-way method of learning is based on many principles. Which of the following is NOT that principle?

- Ans
- A. Principle of logical thinking
 - B. Principle of creativity
 - C. Principle of natural instincts
 - D. Principle of complete freedom

Question ID : 1034352968

Q.20 Which of the following is the indicator of empowered women?

- I. Awareness about her right.
- II. High self-esteem.

- Ans
- A. Neither I nor II
 - B. Only II
 - C. Only I
 - D. Both I and II

Question ID : 1034352960

Section : Discipline3

Q.1 Which of the following processes occur simultaneously during a dialogue?

- Ans
- A. Singing and dancing
 - B. Speaking and listening
 - C. Reading and writing
 - D. Watching and playing

Question ID : 1034352982

Q.2 In the expression '2pq - 3', how many terms are there?

- Ans
- A. 4
 - B. 2
 - C. 1
 - D. 3

Question ID : 1034352985

Q.3 At around the age of one, children produce their first recognizable words which are also known as _____.

- Ans A. babbling
 B. cooing
 C. one word stage
 D. two-word stage

Question ID : 1034352979

Q.4 When children's are listening to something then _____.
I. they are acquiring language and learning to understand.
II. they are absorbing pronunciation and intonation.

- Ans A. Neither I nor II
 B. Both I and II
 C. Only II
 D. Only I

Question ID : 1034352980

Q.5 Which of the following is the example of student friendly methods?
I. Play way method
II. Problem solving method

- Ans A. Only II
 B. Both I and II
 C. Only I
 D. Neither I nor II

Question ID : 1034352976

Q.6 Hard disk and DVD-R are known as _____ in computers.

- Ans A. Input devices
 B. Output device
 C. Storage device
 D. CPU

Question ID : 1034352973

Q.7 In the context of demonstration method, which of the following step is correctly matched?

- I. Planning – motivate the students to arose interest in observing the experiment keenly and to accept new concepts after the demonstration.
II. Demonstration – keep the curiosity of the student alive during the demonstration.

- Ans A. Neither I nor II
 B. Only I
 C. Both I and II
 D. Only II

Question ID : 1034352978

Q.8 Which of the following combination of Assessed thing – Tools and technique used is NOT correct?

- I. Mathematical Reasoning – Observation of interaction in the group
- II. Using mathematical knowledge to solve the problems – projects and assignments

- Ans
- A. Both I and II
 - B. Only I
 - C. Only II
 - D. Neither I nor II

Question ID : 1034352988

Q.9 Which of the following combination of type of objective type questions and its related question is not correct?

- I. Recall type questions – Polythene is biodegradable (true/false)
- II. Recognition type questions – what is the percentage of nitrogen in air?

- Ans
- A. Neither I nor II
 - B. Only I
 - C. Both I and II
 - D. Only II

Question ID : 1034352990

Q.10 Which of the following is a potential medium to express ourselves and connect it with our lives?

- I. Poem
- II. Lesson

- Ans
- A. Only II
 - B. Neither I nor II
 - C. Only I
 - D. Both I and II

Question ID : 1034352983

Q.11 The use of assessment results focuses on three major heads. Which of the following are those heads?

- I. Identifying strengths and weaknesses from the assessment results.
- II. Identifying and addressing typical problems in mathematics learning.
- III. Providing feedback to learners, parents and other stakeholders.

- Ans
- A. Only III
 - B. I, II and III
 - C. II and III
 - D. Only II

Question ID : 1034352987

Q.12 Which of the following is the characteristic of teacher centered approach?

- I. Knowledge is transmitted from the teacher to the student.
- II. The focus is on teaching, instruction and directing rather than on learning.

- Ans
- A. Only I
 - B. Only II
 - C. Both I and II
 - D. Neither I nor II

Question ID : 1034352977

Q.13 'In determining the longitude and latitude of a place and in preparing maps, the knowledge of plane and solid coordinate, geometry is of absolute necessity.' This given statement shows the relation of mathematics, with which branch of knowledge?

- Ans
- A. History
 - B. Art education
 - C. Literature
 - D. Geography

Question ID : 1034352989

Q.14 While introducing new vocabulary, what can a teacher do?
I. Punish children for repeating a new word.
II. Get children to colour pictures of the new things they can name.

- Ans
- A. Only I
 - B. Both I and II
 - C. Neither I nor II
 - D. Only II

Question ID : 1034352981

Q.15 Which of the mode of computer assisted learning is correctly paired?
I. Drill and practice session – Allows experimental data to be analyzed
II. Tutorial Mode – Information and explanatory material is presented in small segments
III. Data analysis – It is the question – answer type program

- Ans
- A. I, II and III
 - B. Only II
 - C. Only III
 - D. I and II

Question ID : 1034352975

Q.16 'Terms having same algebraic factors are known as like terms and terms having different algebraic factors are known as unlike terms'. Which of the following combination is correct?

- I. $2a, -3a$ – Like terms
II. $2a, 5ab$ – unlike terms

- Ans
- A. Only I
 - B. Neither I nor II
 - C. Only II
 - D. Both I and II

Question ID : 1034352986

Q.17 Oral techniques can be a supplementary testing for the practical part of environment studies. What is the limitation of Oral techniques?

- Ans
- A. Does not generate a written record automatically
 - B. A large number of children can be examined at one time
 - C. Provides immediate feedback, this allows the student to learn as they are tested
 - D. Important for development of vocabulary and reasoning power

Question ID : 1034352992

Q.18 In the context of listening story, which of the following statement is correct?

- I. It depends on the interest of the person.
- II. It enhances the creativity of the person.

- Ans
- A. Only I
 - B. Both I and II
 - C. Neither I nor II
 - D. Only II

Question ID : 1034352984

Q.19 In computers, _____ are the fastest, most expensive machines and they have high processing speed.

- Ans
- A. Mini computers
 - B. Super computers
 - C. Micro computers
 - D. Main frames

Question ID : 1034352974

Q.20 If Ashima an environment studies teacher is teaching on the theme 'Food', then in this case comprehensive assessment can include which of the following?

- I. Group discussion on food consumed by animals.
- II. Identifying fruits and vegetables by touch only.
- III. Listing the food items enjoyed by touch only.
- IV. Listing the food items enjoyed by your friends and family members.

- Ans
- A. II and III
 - B. Only II
 - C. I, II and III
 - D. Only I

Question ID : 1034352991

Section : Discipline4

Q.1 Which of the following is a direct colour used in painting?

- I. Dry pastels
- II. Crayons

- Ans
- A. Only II
 - B. Only I
 - C. Both I and II
 - D. Neither I nor II

Question ID : 1034352996

Q.2 Which of the following is the role of music and literature in dance forms?

- I. Sarangi and flute is an musical instrument that helps in a classical dance forms.
- II. Literature can enhance classical dance forms.

- Ans
- A. Neither I nor II
 - B. Only I
 - C. Only II
 - D. Both I and II

Question ID : 1034352997

Q.3 While studying moral development among adolescents, Carol Gilligan focused on women's motives in moral judgment. She found that men rely more on _____.

- I. Justice orientation.
II. Care orientation.

- Ans A. Neither I nor II
 B. Both I and II
 C. Only II
 D. Only I

Question ID : 1034353004

Q.4 The adolescence in the discipline of sociology has been examined by many psychologists. Which of the following psychologists is NOT associated with sociological theory?

- Ans A. Kurt Lewin
 B. Edgar Friedenberg
 C. Allison Davis
 D. Glen Elder

Question ID : 1034353005

Q.5 To learn about the ability of synthesis, what type of question a teacher can ask in the class?

- Ans A. Differentiate
 B. Conclude
 C. Reconstruct
 D. Select

Question ID : 1034352993

Q.6 Which of the following statements is correct regarding a growth spurt?

- I. Growth spurt is complete at around age 17-19 in girls.
II. Growth spurt begins at about 10-12 years in boys.

- Ans A. Neither I nor II
 B. Only I
 C. Only II
 D. Both I and II

Question ID : 1034353008

Q.7 Which of the following is not an outdoor game?

- Ans A. Lawn tennis
 B. Rugby
 C. Badminton
 D. Cricket

Question ID : 1034352998

Q.8 Which of the following statement is NOT correct?
I. In the game of chess, each players has 16 pieces in the beginning.
II. The player with black pieces always commences the game of chess.

- Ans
- A. Neither I nor II
 - B. Both I and II
 - C. Only II
 - D. Only I

Question ID : 1034353000

Q.9 निम्नलिखित में से कौन-सा 'पंच कोष' कहता है कि जो कुछ भी हम खाते हैं वह हमारा शरीर है?

- Ans
- A. विज्ञानामय कोशा
 - B. आनन्दमय कोशा
 - C. मनोमाया कोशा
 - D. अज्ञामय कोशा

Question ID : 1034353001

Q.10 Lack of 'community participation' is a common problem with programs like midday meal scheme. Which of the following things can be done to promote community participation?

- I. Make regular enquiries from children about the quality of midday meals that how nutritious the meal is and etc.
II. Ensure surveillance of the food delivery arrangements and expenditure of funds.

- Ans
- A. Both I and II
 - B. Only I
 - C. Neither I nor II
 - D. Only II

Question ID : 1034353011

Q.11 School garden can also teach _____.

- I. Place-making
II. localization

- Ans
- A. Only II
 - B. Only I
 - C. Both I and II
 - D. Neither I nor II

Question ID : 1034352999

Q.12 Which of the following statement is regarding Kurt Lewin's field theory on adolescents?

- I. An adolescent between the two worlds is a marginal man.
II. Behavior of an individual results from interaction of the person with his environment.

- Ans
- A. Neither I nor II
 - B. Both I and II
 - C. Only II
 - D. Only I

Question ID : 1034353006

Q.13 National policy of children, 2013 considers child as any person below the age of _____.

- Ans A. 18 years
 B. 10 years
 C. 12 years
 D. 15 years

Question ID : 1034353003

Q.14 In India, Adolescence Education Programme was launched in _____.

- Ans A. 2005
 B. 2000
 C. 2012
 D. 2010

Question ID : 1034353002

Q.15 निम्नलिखित में से कौन से मूल आसन हैं?

- I. सवासना
II. हलासन
III. शलभासन

- Ans A. I, II तथा III
 B. केवल III
 C. II तथा III
 D. केवल I

Question ID : 1034353009

Q.16 Who popularly known as 'father of history'?

- Ans A. Aristotle
 B. Herodotus
 C. Democritus
 D. Epicurus

Question ID : 1034352994

Q.17 Which of the following is a fundamental offensive skill in Kabaddi?

- Ans A. Leg thrust
 B. Knee catch
 C. Normal grip
 D. Wrist catch

Question ID : 1034353012

Q.18 _____ pranayama is about alternate nostril breathing.

- Ans A. Ujjayi Pranayama
 B. Dirgaya Pranayama
 C. Anuloma Pranayama
 D. Viloma Pranayama

Question ID : 1034353010

Q.19 Which of the following statement is correct regarding first reconceptualization of population education?

- I. It was a response to the recommendation on the international conference on population of 1984.
II. The conceptualized framework changed its demography-laden concept.

- Ans A. Only II
 B. Both I and II
 C. Only I
 D. Neither I nor II

Question ID : 1034353007

Q.20 Which of the following is the nature of history subject?

- I. It is an unending dialogue between the present and the past.
II. It is the interpretation of the past with intention of predicting future.

- Ans A. Neither I nor II
 B. Both I and II
 C. Only II
 D. Only I

Question ID : 1034352995

Section : Discipline5

Q.1 Kalajathas is a Community initiative celebrated in which state?

- I. Rajasthan
II. Bihar

- Ans A. Neither I nor II
 B. Only I
 C. Both I and II
 D. Only II

Question ID : 1034353028

Q.2 Which of the following pair is not correctly matched?

- Ans A. Helping to prevent and control communicable diseases – School health services
 B. School toilets – Healthful school environment
 C. Maintaining health of school personnel – Healthful school environment
 D. Lighting – Healthful school environment

Question ID : 1034353013

Q.3 Which of the following statement is correct related to work education?

- I. Gandhiji wanted mechanical work as a compulsory part of education.
II. Bookish knowledge develops practical capabilities and values of a man.

- Ans A. Both I and II
 B. Only I
 C. Only II
 D. Neither I nor II

Question ID : 1034353015

Q.4 Which of the following functions is performed by school management committee?

- I. Monitor the looking of the school.
II. To amend the constitutional Acts Related to education.

- Ans A. Neither I nor II
 B. Only I
 C. Both I and II
 D. Only II

Question ID : 1034353030

Q.5 _____ are those coordinated activities which are completed in natural environment with some important skill for learning activity.

- Ans A. Project
 B. Observation
 C. Practical
 D. Excursion

Question ID : 1034353017

Q.6 Which of the following pair is correctly matched in the context of work?

- I. Potter – Makes clay utensils
II. Farmer – Agricultural activities

- Ans A. Only I
 B. Both I and II
 C. Only II
 D. Neither I nor II

Question ID : 1034353014

Q.7 Which of the following institution has been involved to implement right to education?

- I. Parent Teacher Association (PTA).
II. Village and Urban Slum Level Education Committee (VEC).
III. Members of Panchayati Raj institutions.

- Ans A. II and III
 B. I, II and III
 C. I and III
 D. Only I

Question ID : 1034353022

Q.8 Education in the true sense is _____.

- I. Helping the individual to be mature and free.
II. To flower greatly in love and goodness.

- Ans A. Neither I nor II
 B. Only II
 C. Only I
 D. Both I and II

Question ID : 1034353021

Q.9 In India, which of the following bodies have been established under SSA?

- I. Block Resource Centres
- II. Cluster Resource Centres

- Ans
- A. Neither I nor II
 - B. Only I
 - C. Only II
 - D. Both I and II

Question ID : 1034353032

Q.10 In concentration camps in Nazi Germany, _____ were the prisoners who acted as trustees, having special privileges or well-known prisoners.

- Ans
- A. Kann
 - B. Capos
 - C. Shema
 - D. Finis

Question ID : 1034353019

Q.11 What is the role of parents in assessment?

- I. Only educated parents can evaluate the progress.
- II. Illiterate parents can also co-operate in the learning process.

- Ans
- A. Only I
 - B. Neither I nor II
 - C. Only II
 - D. Both I and II

Question ID : 1034353016

Q.12 Which of the following is important for the community mobilizer?

- I. Attitudes
- II. Skills
- III. Knowledge

- Ans
- A. I, II and III
 - B. I and II
 - C. I and III
 - D. II and III

Question ID : 1034353029

Q.13 In concentration camps in Nazi Germany, what kind of prisoners would be sent to one of the big central camp that were fitted with gas chambers and crematoriums?

- I. Sick or feeble prisoners.
- II. Physically fit and capable prisoners.

- Ans
- A. Only I
 - B. Neither I nor II
 - C. Only II
 - D. Both I and II

Question ID : 1034353020

Q.14 Which of the following is the leadership function that is identified by Leithwood and Duke?

- I. Transformational
- II. Immoral

- Ans
- A. Neither I nor II
 - B. Only II
 - C. Both I and II
 - D. Only I

Question ID : 1034353026

Q.15 According to whom, the distribution of income is determined by the distribution of job opportunities and not by the distribution of labour queue?

- Ans
- A. Schultz
 - B. Henri Fayol
 - C. Thurow
 - D. Harold Koontz

Question ID : 1034353031

Q.16 Which of the following point is important while planning for the activities related to work education?

- I. Providing a chance to arouse interest.
- II. Providing opportunities for self-expression.
- III. Bringing awareness about environment conservation.

- Ans
- A. I, II and III
 - B. Only I
 - C. Only III
 - D. II and III

Question ID : 1034353018

Q.17 Through the functions of planning, organizing, directing and controlling, in which process the goals are set and achieved for the institution?

- Ans
- A. Management
 - B. Abatement
 - C. Deferment
 - D. Encroachment

Question ID : 1034353024

Q.18 Which of the following pair is correctly matched in context of leadership?

- I. Relationship – Benefit the people that the leader represents.
- II. Mutual influence – Influence the leader exerts on the people and is influenced by them.

- Ans
- A. Only I
 - B. Only II
 - C. Neither I nor II
 - D. Both I and II

Question ID : 1034353027

Q.19 Which of the following statement is correct, in the context of school-community relationships?

- I. The behavior of the teacher leader is the most important factor.
- II. It is dependent on the values, attributes, skills and actions of the teacher leader.

- Ans
- A. Neither I nor II
 - B. Only II
 - C. Only I
 - D. Both I and II

Question ID : 1034353025

Q.20 Which of the following community participation is correctly matched with their state government initiatives?

- I. Madhya Pradesh – Jan Shiksha Adhinyam Act 2002.
- II. Assam – Bal mitra kendras.
- III. Bihar – Shala pravesh utsav.
- IV. Gujarat – Committees of sakhi, sahyogini and Anganwadis.

- Ans
- A. I and III
 - B. I and IV
 - C. I, II and III
 - D. II, III and IV

Question ID : 1034353023

अभ्यास
CDP and Pedagogy with Rohit Sir